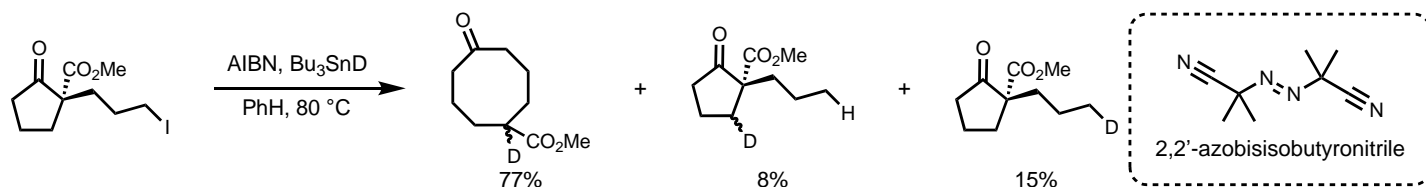




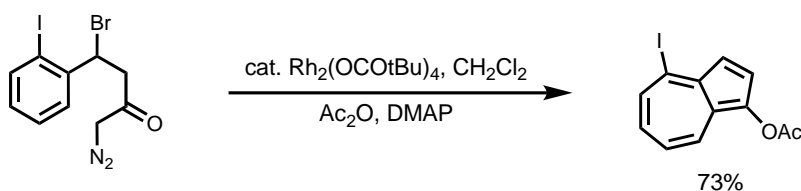
Name:

Draw the mechanism for following reactions.

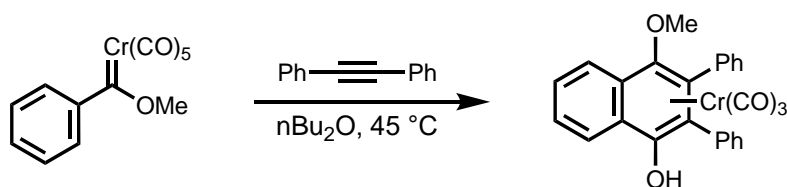
1. *J. Org. Chem.* **2005**, *70*, 9417.



2. *J. Org. Chem.* **2004**, *69*, 8652.



3. *Angew. Chem. Int. Ed. Engl.* **1975**, *14*, 644.



4. *J. Am. Chem. Soc.* **2002**, *124*, 13398.

